

Nursling C of E Primary School



Love . Hope . Courage

Nursling Street

Nursling

Southampton

SO16 0XH

Email: adminoffice@nursling.hants.sch.uk

Telephone: 02380732289

Headteacher: Mrs Joanne Jearrad BEd Hons

13th July 2020

Dear Parent/Guardian,

Please find access of a work pack for your child to complete over the course of this week.

The pack contains:

5 maths activity sheets

5 English based activities

3 or 4 Topic related activities based on the topic they are currently working on in class.

Children can complete this work in their home learning books.

In addition to the work stated above your child should complete the following daily activities:

Reading

You must hear your child read for at least 10 minutes every day but if you can hear them read for longer that will really benefit them.

A good website to access is booktrust.org.uk where you can download a 'Reading with your child' booklet that is age appropriate.

Please ask your child questions about the text and what they can infer from the pictures.

Spellings / Phonics

Please support your child to learn all phase 5 sounds. A good website for this is www.phonicsplay.co.uk (not through Google Chrome), please use the free resources.

Mindfulness

In school, we do a mindful minute every day. Please ask your child to either sit quietly for a minute, colour a mindful drawing. A good website that offers 25 simple mindfulness activities for children is: parentswithconfidence.com

If you need to make contact with school during this time, please do so through email to adminoffice@nursling.hants.sch.uk

Other websites you may find useful whilst studying at home include:

www.topmarks.co.uk

Don't forget to use the Espresso Login in your child's Communication Journal

Yours sincerely

Mr Allen

Birch Class

Phonics Activity 1

Sound button and draw a line to the picture



chimney



donkey



cockney



chutney

Phonics Activity 2

I _____ my best at football.

The flowers will _____ because it is winter.

My Grandma makes the best _____.

I _____ when I fell over.

tried	pie
die	cried

SPaG Activity 3

Tick **one** word that can have 'er' and 'est' added at the end to make a new word.

- king ☐
- beach ☐
- quick ☐



Help poor Mr Whoops by circling the correct spelling.

- are
- ar
- arr



Put a tick next to the real words and a cross next to the alien words.

- play ☐ teach ☐
- day ☐ teash ☐
- vay ☐ eat ☐



Find the hidden words.

- our s a y s g
- here l n h h o
- says e i t e n
- your y o u r c
- once o u y e e
- p r o m e


Fill in the missing words in the table.

Singular (one)	Plural (more than one)
bell	
	stairs



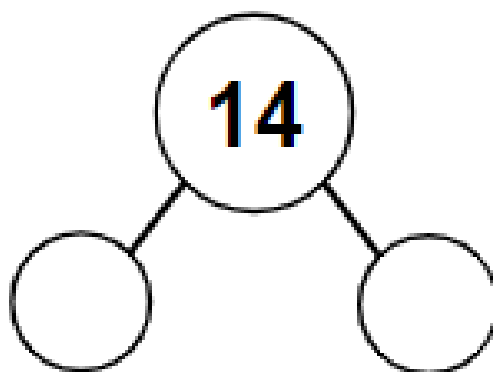
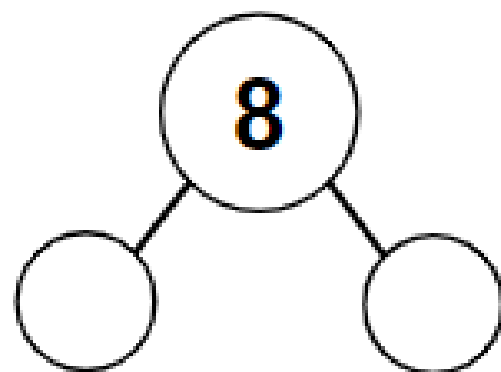
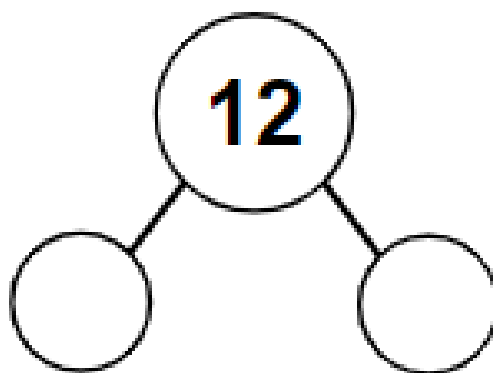
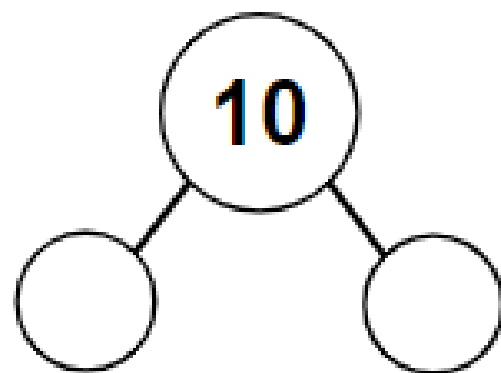
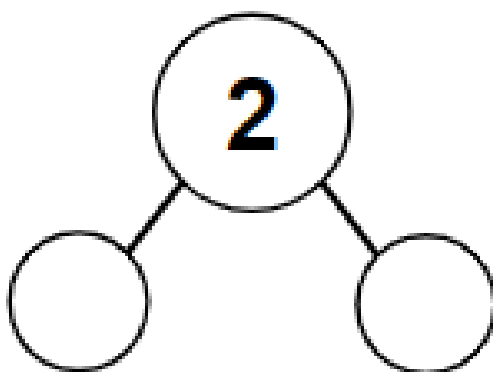
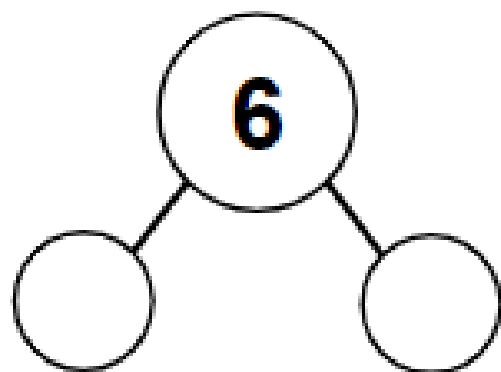
Write these letters as capital letters.

- b
- h
- k



Maths Activity 1 –

Can you complete the halving diagrams?



Maths Activity 2

Can you solve these division number facts? Use objects to help you.

$$8 \div 2 =$$

$$20 \div 10 =$$

$$4 \div 2 =$$

$$22 \div 2 =$$

$$15 \div 5 =$$

$$18 \div 2 =$$

$$20 \div 5 =$$

$$14 \div 2 =$$

$$10 \div 10 =$$

$$10 \div 2 =$$

Maths Activity 3 –

Can you halve these numbers pictorially?

14

6

12

10

8

2

4

16

20

18

Maths Activity 4 –


Can you solve this problem by drawing dots?

How many sets of 5 one penny coins can be made from 25 coins?



Maths Activity 5 –

Can you solve this problem?



How many groups of 2 can be made from 16 children?


Reading Activity 1

Watch the story of Snail and the Whale.

Who was your favourite character?
Draw a picture and write a sentence
to go with it.

Reading Activity 2


How does the snail save the whale?



Reading Activity 3

What would you do to save the whale?

Writing activity 1 – Plan and write your very own story. Use the story map to help you



Writing activity 2

Write your story

Figure 1 is a line graph showing the percentage of respondents who believe that the use of force is justified in various circumstances. The x-axis represents the percentage of respondents who believe that the use of force is justified, ranging from 0% to 100%. The y-axis represents the percentage of respondents who believe that the use of force is justified, ranging from 0% to 100%. The graph shows a positive correlation between the two variables, with a regression line indicating a strong positive relationship.

[illegible]

[illegible]

Figure 1 is a line graph showing the percentage of respondents who believe that the use of force is justified in various circumstances. The x-axis represents the percentage of respondents who believe that the use of force is justified, ranging from 0% to 100%. The y-axis represents the percentage of respondents who believe that the use of force is justified, ranging from 0% to 100%. The graph shows a positive correlation between the two variables, with a regression line indicating a strong positive relationship.

[illegible]

Art lesson 4 – can you draw one of these



