

# Space Wars

Number Bonds to 20



twinkl

# Instructions

Look at the number on the space station.

Decide if the Space Master or the Space Villain has the correct number bond to make 20.

You can move onto the next question by clicking on the green arrow once you have answered correctly.

Have fun!



Space Master



Space Villain



Who can create the number bond to 20?



2

Space Master



4

Space Villain

Correct.  
 $18 + 2 = 20$   
Well done!



next slide



**Incorrect.**  
 **$18 + 4 = 22$**



**click to go back**



Who can create the number bond to 20?



5

Space Master



4

Space Villain

Correct.  
 $16 + 4 = 20$   
Well done!



next slide




**Incorrect.**  
 **$16 + 5 = 21$**



**click to go back**



Who can create the number bond to 20?



6

Space Master



5

Space Villain

Correct.  
 $15 + 5 = 20$   
Well done!



next slide





**Incorrect.**  
 **$15 + 6 = 21$**



**click to go back**

Who can create the number bond to 20?



7

Space Master



9

Space Villain



Correct.  
 $13 + 7 = 20$   
Well done!



next slide



**Incorrect.**  
 **$13 + 9 = 22$**



**click to go back**



Who can create the number bond to  
twenty?



eight

Space Master



nine

Space Villain

Correct.  
Twelve add eight equals twenty.  
Well done!



next slide



**Incorrect.**  
**Twelve add nine equals twenty-one.**



**click to go back**



Who can create the number bond to  
twenty?



four

Space Master



six

Space Villain

**Correct.**  
**Fourteen add six equals twenty.**  
**Well done!**



next slide




**Incorrect.**  
**Fourteen add four equals eighteen.**



**click to go back**



Who can create the number bond to  
twenty?



one

Space Master



two

Space Villain

Correct.  
Nineteen add one equals twenty.  
Well done!



next slide



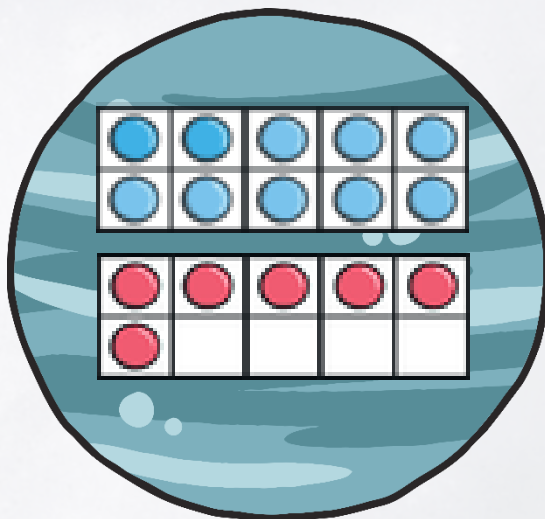
**Incorrect.**  
**Nineteen plus two equals twenty-one.**



**click to go back**



# Who can create the number bond to 20?




Space Master



Space Villain



Correct.  
 $16 + 4 = 20$   
Well done!



next slide



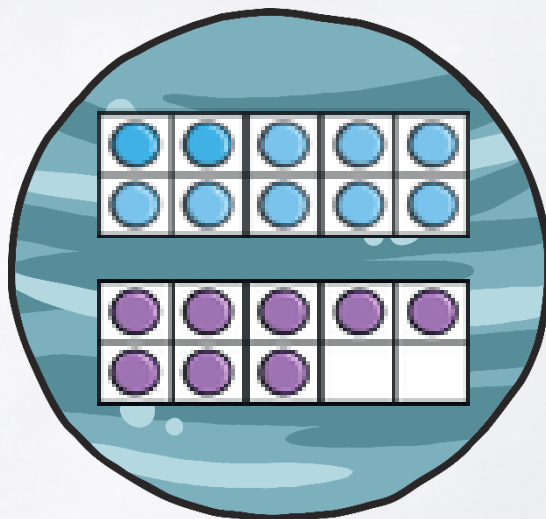
**Incorrect.**  
**16 + 5 = 21**



**click to go back**



# Who can create the number bond to 20?



Space Master



Space Villain



Correct.  
 $18 + 2 = 20$   
Well done!



next slide



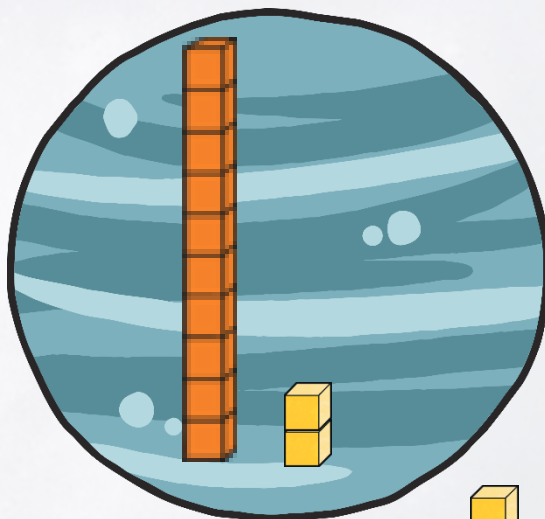
**Incorrect.**  
 **$18 + 3 = 21$**



**click to go back**



# Who can create the number bond to 20?

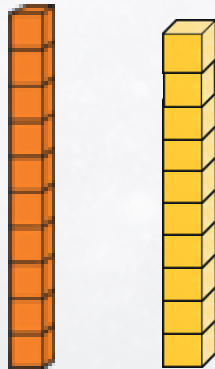


Space Master



Space Villain

Correct.  
 $12 + 8 = 20$   
Well done!



next slide



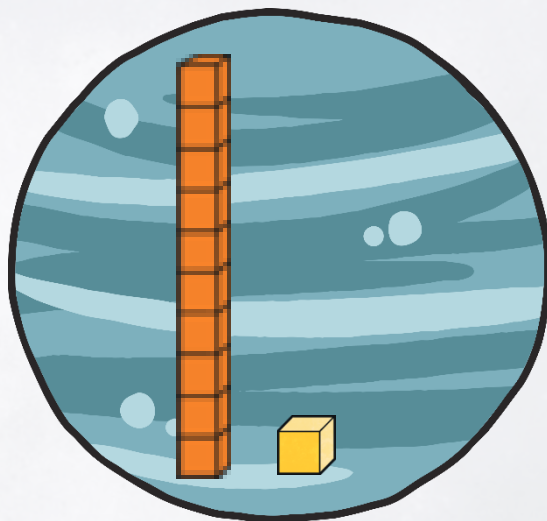
**Incorrect.**  
 **$12 + 6 = 18$**



**click to go back**



# Who can create the number bond to 20?



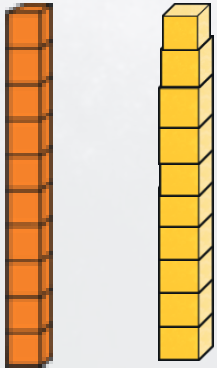
Space Master



Space Villain



Correct.  
 $11 + 9 = 20$   
Well done!



next slide



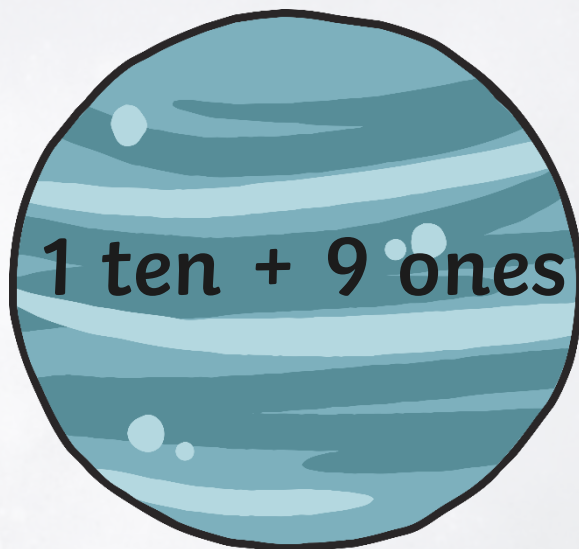
**Incorrect.**  
 **$11 + 8 = 19$**



**click to go back**



Who can create the number bond to 20?



1 one

Space Master



2 ones

Space Villain

Correct.  
1 ten and 9 ones + 1 one = 20  
Well done!



next slide



**Incorrect.**

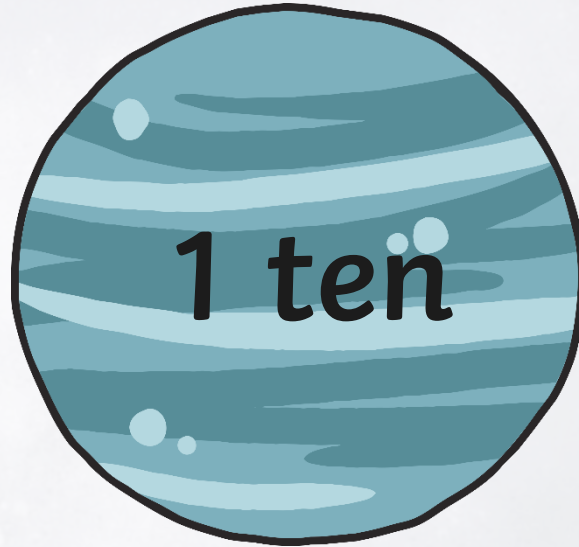
**1 ten and 9 ones + 2 ones = 21**



**click to go back**



Who can create the number bond to 20?



9 ones

Space Master



1 ten

Space Villain

Correct.  
1 ten and 1 ten = 20  
Well done!



next slide



**Incorrect.**  
**1 ten and 9 ones = 19**



**click to go back**





twinkl

