

Addition with Money








Find the total cost of the items below. Use the space to show your working.

1.  = 
  = 

Total price = _____

2.  = 
  = 
  = 

Total price = _____

3.  =  
  = 
  = 

Total price = _____

4.  =  
  = 

Total price = _____

5.  = 
  = 
  = 

Total price = _____

Addition with Money

Find the total cost of the items below. Use the space to show your working.

6.

An apple is shown next to a 10p coin. Below it, a bunch of tomatoes is shown next to one 10p coin and two 5p coins.

Total price = _____

7.

A carton of milk is shown next to a 2p coin. Below it, a slice of cheese is shown next to one 2p coin, one 1p coin, and three 5p coins.

Total price = _____

8.

Two bars of chocolate are shown next to one 2p coin and one 1p coin. Below it, a carton of eggs is shown next to one 2p coin and one 10p coin.

Total price = _____

9.

Two bars of chocolate are shown next to one 2p coin and one 1p coin. A carton of milk is shown next to one 2p coin. Below it, a carton of eggs is shown next to one 2p coin and one 10p coin.

Total price = _____

10.

A loaf of bread is shown next to one 2p coin, one 10p coin, and two 5p coins. Below it, a cup of yogurt is shown next to one 10p coin and one 5p coin.

Total price = _____

Addition with Money

Find the total cost of the items below. You will find the price of each item from the Grocery Store Price List. Use the space to show your working.

Grocery Store Price List:

apple 50p

box of peaches £2

eggs £2.50

banana 40p

pack of tomatoes 90p

spaghetti £2.30

carrot 50p

milk £2.80

pepper 60p

pineapple £1.50


cheese £2.90

rice £3.60

pack of strawberries 80p

chocolate £3.10

1.




Total price = _____

2.



Total price = _____

3.



Total price = _____

4.




Total price = _____

5.



Total price = _____

6.



Total price = _____

Addition with Money

Find the total cost of the items below. You will find the price of each item from the Grocery Store Price List. Use the space to show your working.

Grocery Store Price List:

apple 50p

box of Peaches £2

eggs £2.50

banana 40p

pack of Tomatoes 90p

spaghetti £2.30

carrot 50p

milk £2.80

pepper 60P

pineapple £1.50

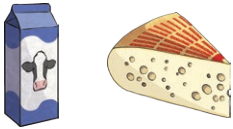
cheese £2.90

rice £3.60

pack of strawberries 80p


chocolate £3.10

7.



Total price = _____

8.



Total price = _____

9.



Total price = _____

10.



Total price = _____

11.



Total price = _____

12.



Total price = _____

Addition with Money

Find the total cost of the items below. You will find the price of each item from the Grocery Store Price List. Use the space to show your working.

Grocery Store Price List:

apple 53p

pack of tomatoes 78p

pepper 60p

banana 41p

milk £2.81

rice £3.65

carrot 59p

cheese £2.92

tuna £5.65

pineapple £1.52

chocolate £3.10

bacon £1.82


pack of strawberries 84p

eggs £1.24

box of peaches £1.32

spaghetti £2.38

1.




Total price = _____

2.



Total price = _____

3.



Total price = _____

4.



Total price = _____

5.



Total price = _____


6.




Total price = _____

Addition with Money


Find the total cost of the items below. You will find the price of each item from the Grocery Store Price List. Use the space to show your working.

7. 


Total price = _____

8. 


Total price = _____

9. 


Total price = _____

10. 

Total price = _____

11. 


Total price = _____

12. 

Total price = _____

13. 

Total price = _____

14. 

Total price = _____

Addition with Money

Challenge: Find the cost for each recipe using the items in the Grocery Store Price List.

Recipe 1: Fruit Salad

Ingredients:



Total price = _____

Recipe 2: Creamy vegetable pasta

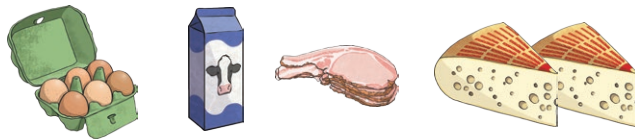
Ingredients:



Total price = _____

Recipe 3: Omelette

Ingredients:



Total price = _____

Addition with Money **Answers**

★	★★	★★★
1. 90p	1. 90p	1. 94p
2. £1.40	2. £1.40	2. £1.59
3. £2.80	3. £2.80	3. £2.89
4. £3.50	4. £3.50	4. £2.84
5. £1.90	5. £1.90	5. £1.96
6. £1.40	6. £1.40	6. £1.31
7. £4.55	7. £5.70	7. £5.73
8. £5.50	8. £5.60	8. £4.34
9. £7.50	9. £8.40	9. £7.15
10. £2.60	10. £4.80	10. £3.62
	11. £3.80	11. £3.76
	12. £7.40	12. £7.35
		13. £8.81
		14. £4.44
		Challenge:
		Recipe 1: £7.75
		Recipe 2: £16.77
		Recipe 3: £11.71