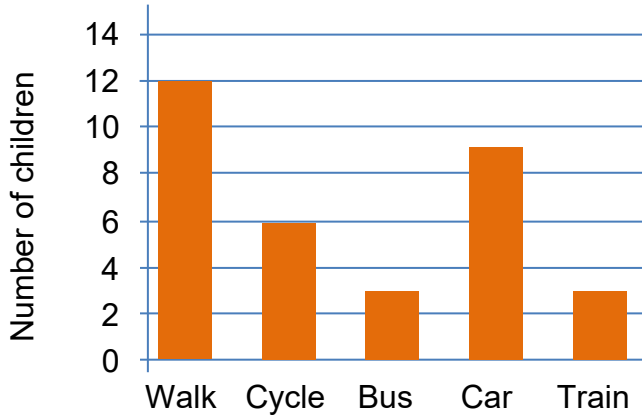


Revise interpreting bar charts and tables  
Maths worksheets from urbrainy.com



Here is a bar chart showing how the children in Year 5 get to school.  
Complete the table using the information on the graph.



Transport	Number of children
Walk	

Draw a bar chart to show how these adults get to work in the morning.  
Remember to label the axes, give a title and think about the scale for the number of adults.

Transport	Number of adults
Walk	11
Cycle	4
Bus	13
Car	14
Train	11



Represent the data in this table of house points as a bar chart.  
Remember to label the axes, give a title and think about the scale for the number of points.

House	Points
Wrens	50
Robins	80
Thrushes	130
Owls	70
Finches	90



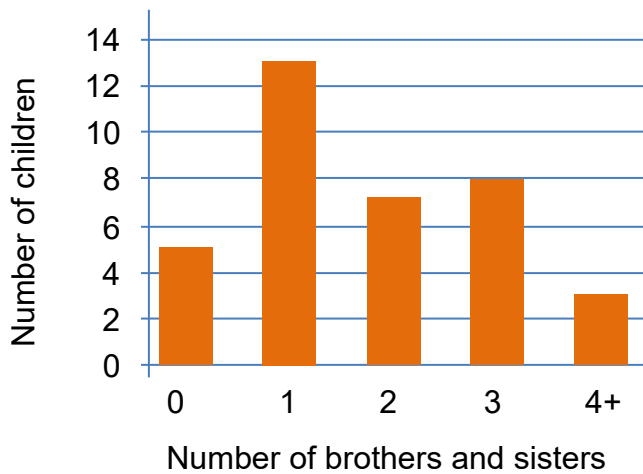
Name:

## Revise interpreting bar charts and tables

Maths worksheets from [urbrainy.com](http://urbrainy.com)



Here is a bar chart showing the number of brothers and sisters children in 4R have. Complete the table using the information on the graph.



Brothers and sisters	Number of children
0	

Draw a bar chart to show the favourite sports of children in Class 4T. Remember to label the axes, give a title and think about the scale for the number of children.

Car	Children
Football	13
Rugby	6
Hockey	3
Netball	7
Rounders	5



Represent the data in this table of the number of children with pets. Remember to label the axes, give a title and think about the scale for the number of children.

Pet	Number of children
Bird	80
Cat	110
Dog	140
Fish	60
Reptile	50



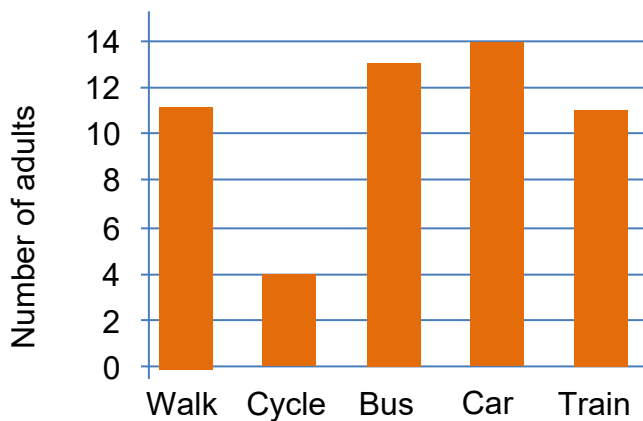
Name: \_\_\_\_\_

Answers

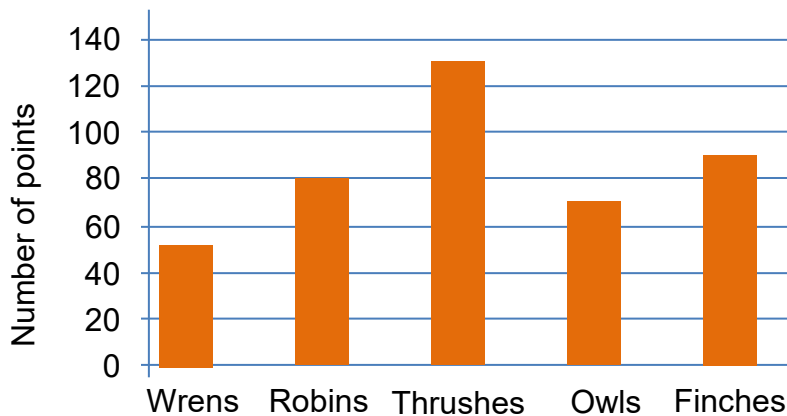
Page 1

Transport	Number of children
Walk	12
Cycle	6
Bus	3
Car	9
Train	3

Graph showing how adults get to work in the morning.



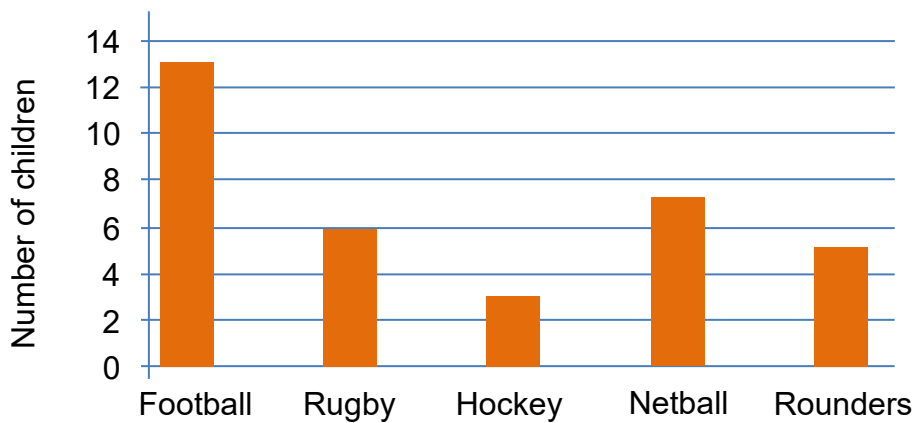
Graph showing the number of house points gained.



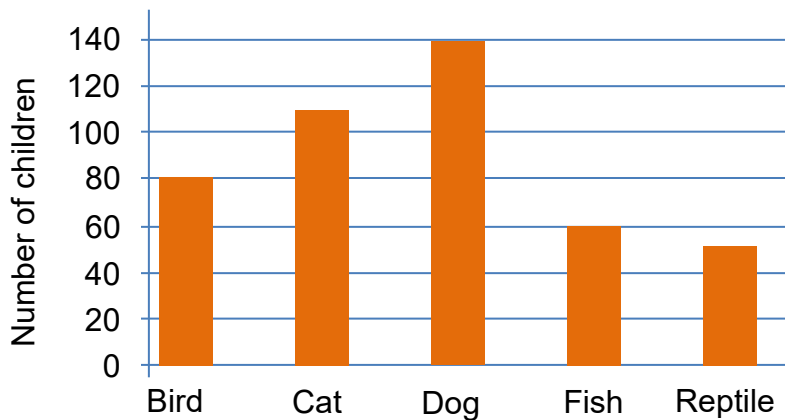
Page 2

Brothers and sisters	Number of children
0	5
1	13
2	7
3	8
4+	3

Graph showing the favourite sports of children in 4T.



Graph showing the number of children with pets.



Name:

Page 4