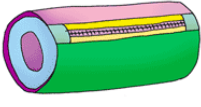







Lesson 3

Worksheet 1

					
Pencil case	Coloured pencils	Ruler	Rubber	Pack of pens	Sharpener
£5.95	£3.20	£1.15	45p	£4.00	36p

Challenge: Can you write your answers in both £ and pence?

- 1) James buys a rubber and a sharpener. He pays with a **£1.00 coin**. How much change does he receive?
- 2) Ellen buys a ruler and a rubber. She pays with a **£2.00 coin**. How much change is she given?
- 3) Tom has **£5.00**. He buys a pack of pens and a rubber. How much money does he have left over?
- 4) Sophie buys a packet of coloured pencils and a sharpener. She pays with a **£5.00 note**. How much change is she given?
- 5) Joe buys a packet of coloured pencils and a ruler. He pays with a **£5.00 note**. How much change is he given?
- 6) Amy has saved up **£10.00**. She buys a pencil case and a ruler. How much money does she have left over?
- 7) Amy wants to buy a packet of coloured pencils with her change. How much more money will she need?
- 8) Can you write and solve your own word problem, involving adding together the cost of two items and finding change?