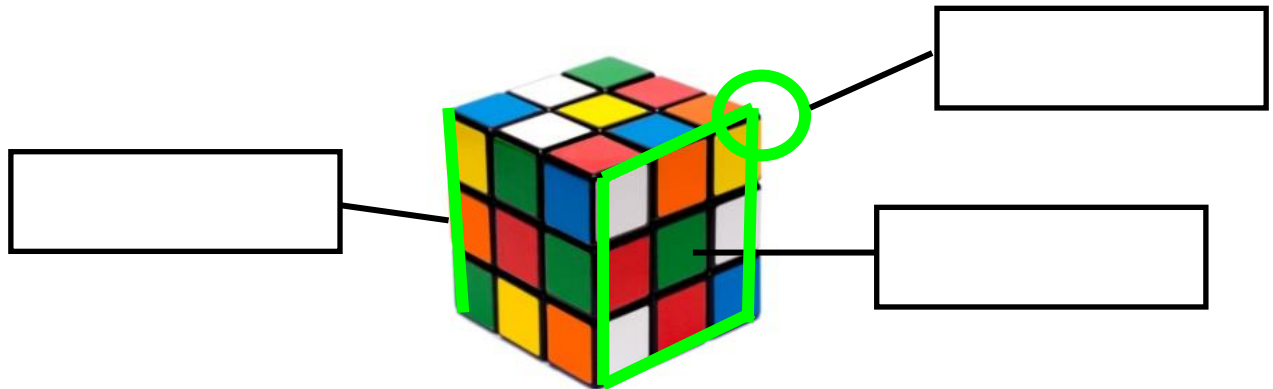


Can you label this picture of a cube?



Vertex (or corner)

Edge (or side)

Face

Investigation: Can you find out how many vertices, edges and faces the following 3D shapes have?



A Cube

Vertices:

Edges:

Faces:

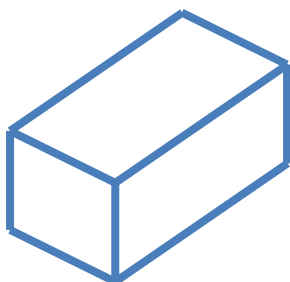


A Cylinder

Vertices:

Edges:

Faces:



A Cuboid

Vertices:

Edges:

Faces:




A Pyramid

Vertices:

Edges:

Faces:

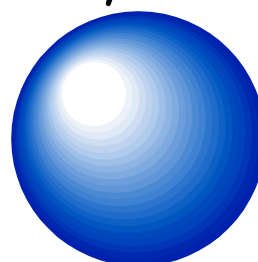


A Cone

Vertices:

Edges:

Faces:



A Sphere

Vertices:

Edges:


Faces:

3D Shape Treasure Hunt

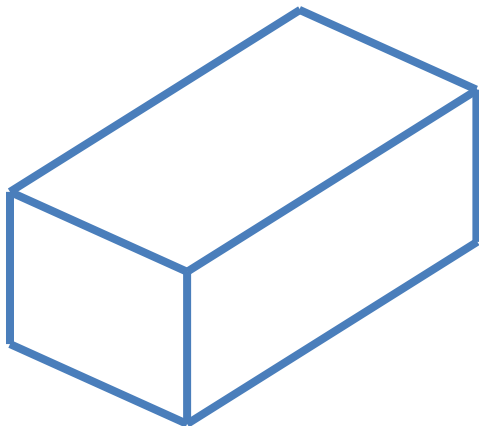
Can you find the following shapes around the house?




A Cube



A Cylinder



A Cuboid



A Sphere