


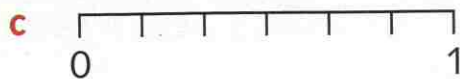
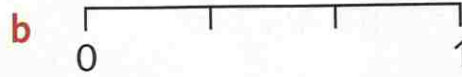
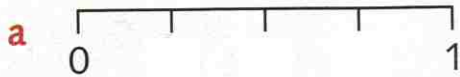
# Fractions and number lines

Use the number line to connect fractions and numbers



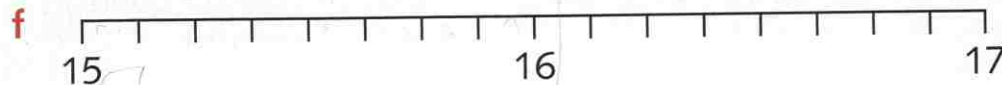
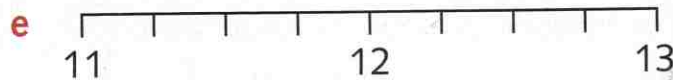
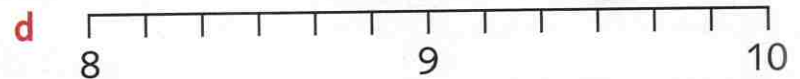
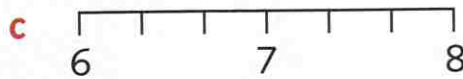
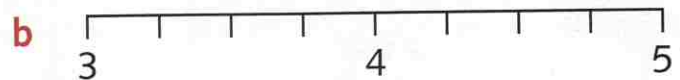
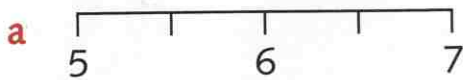
Challenge 1

Write the fractions that are missing from the number lines.




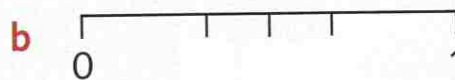
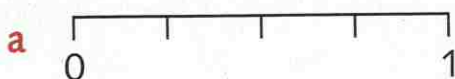
Challenge 2

Write the fractions that are missing from the number lines.



Challenge 3

1 Write the fractions that are missing from the number lines. Use two different denominators in your fractions.



2 Draw a number line 12 cm long. Mark the half and the quarter intervals on your number line.