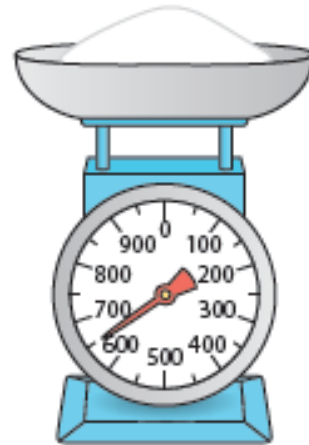


Maths 5

Mastery

1.

What is the mass of flour on the scales?




I need $\frac{3}{4}$ of a kg to make a cake.

How much more flour do I need to add to the scales?

2.


6 toy cars balance 2 dolls. 4 dolls balance 1 toy robot.



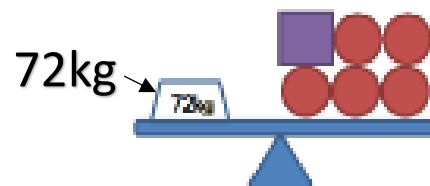
If the robot weighs 3kg, what does each toy car weigh?

3.

Here is a balance.



Here is another balance.



Work out the value of

