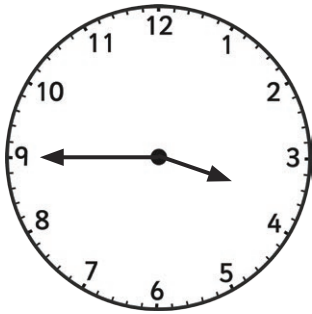


# Read, Write and Compare the Time: 12-Hour and 24-Hour

Read the time on these analogue clocks. Write each time in 12-hour and 24-hour formats.




In the morning

---



---

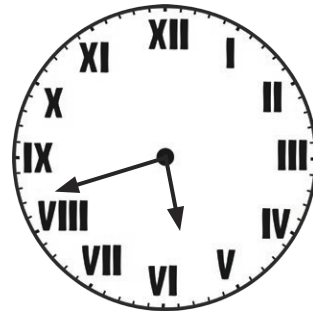


In the evening

---



---




In the afternoon

---



---




In the early morning

---



---

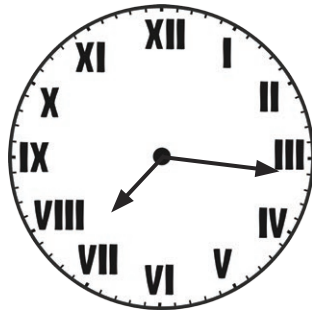


In the afternoon

---



---




In the morning

---



---



In the morning

---



---




In the evening

---



---




In the morning

---



---




In the afternoon

---



---



In the evening

---



---



In the afternoon

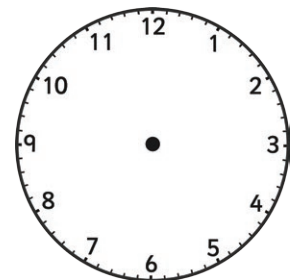
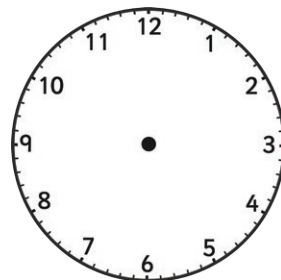
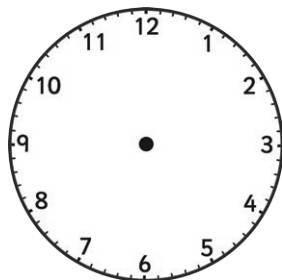
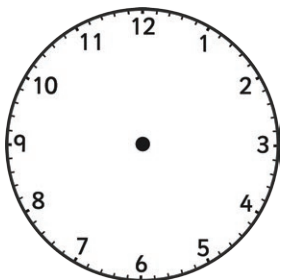
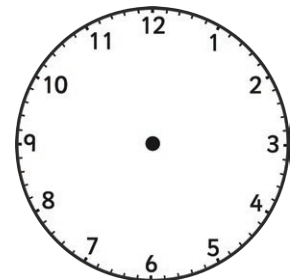
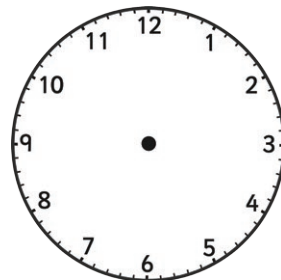
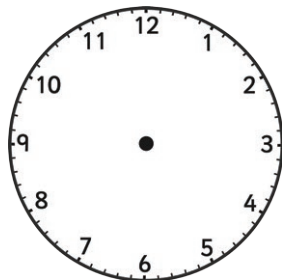
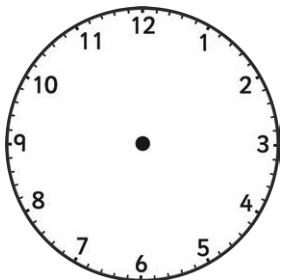
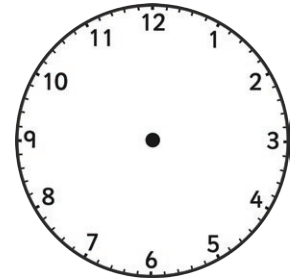
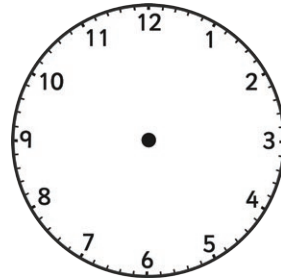
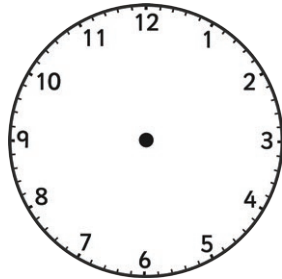
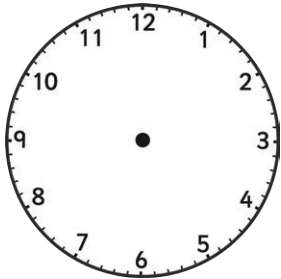
---



---

# Read, Write and Compare the Time: Match Analogue to Digital

Draw the time on each clock to match the digital time.



# Compare the Time: Which Is Earlier?

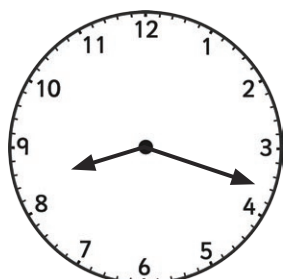
For each pair of clocks, ring the earlier time.



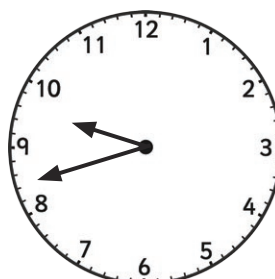
(morning)



(afternoon)




(evening)



(evening)




(afternoon)



(morning)



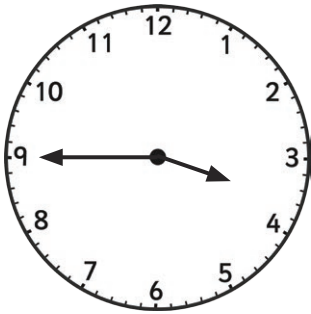
(morning)



(afternoon)

# Read, Write and Compare the Time: 12-Hour and 24-Hour Answers


Read the time on these analogue clocks. Write each time in 12-hour and 24-hour formats.



In the morning

**3:45 a.m.**

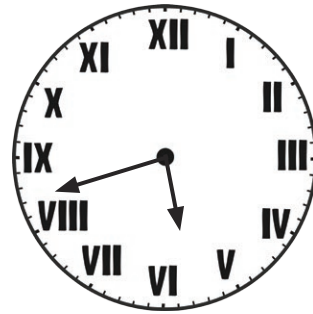
**03:45**



In the evening

**11:34 p.m.**


**23:34**



In the afternoon

**5:42 p.m.**

**17:42**



In the early morning

**12:25 a.m.**

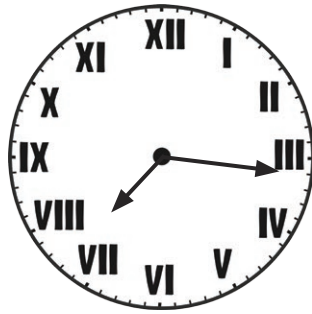
**00:25**



In the afternoon

**2:37 p.m.**


**14:37**



In the morning

**7:16 a.m.**

**07:16**



In the morning

**4:09 a.m.**


**04:09**



In the evening

**8:02 p.m.**


**20:02**



In the morning

**10:07 a.m.**


**10:07**



In the afternoon

**12:56 p.m.**


**12:56**



In the evening

**9:28 p.m.**

**21:28**






In the afternoon

**1:47 p.m.**

**13:47**

# Read, Write and Compare the Time: Match Analogue to Digital Answers

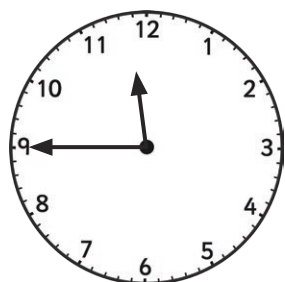
Draw the time on each clock to match the digital time.



# Compare the Time: Which Is Earlier?

## Answers


For each pair of clocks, ring the earlier time.



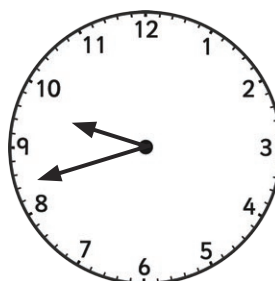
(morning)



(afternoon)



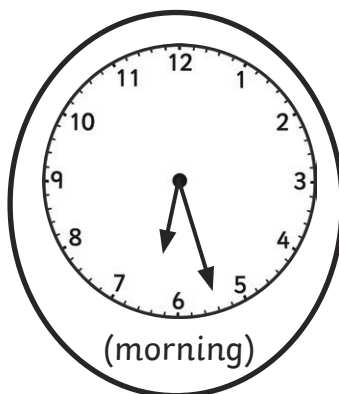
(evening)



(evening)




(afternoon)



(morning)



(morning)



(afternoon)