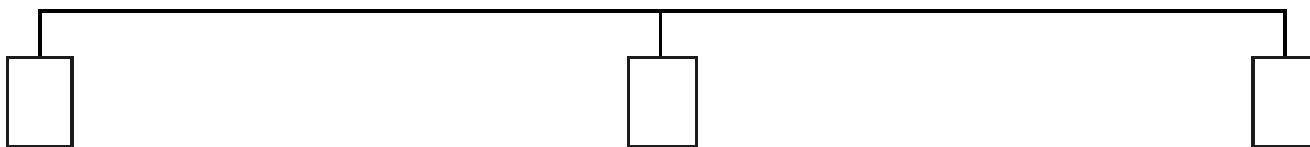


Maths 4

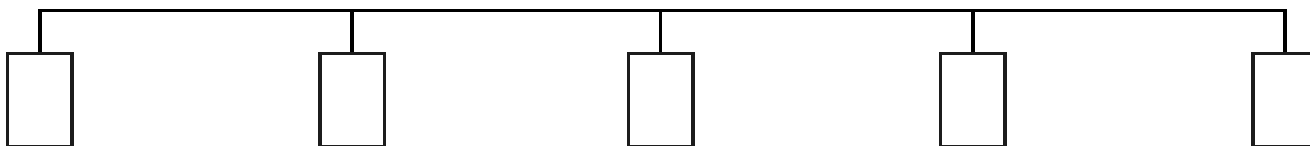
Fill in the boxes with the fractions given.

Your number line should start with 0 and end with 1.

1. $\frac{1}{2}$



2. $\frac{1}{4}$



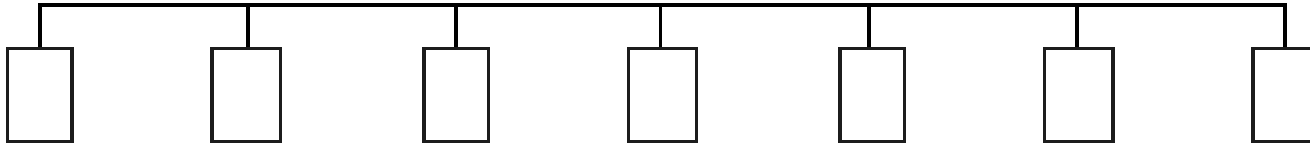
3. $\frac{1}{5}$



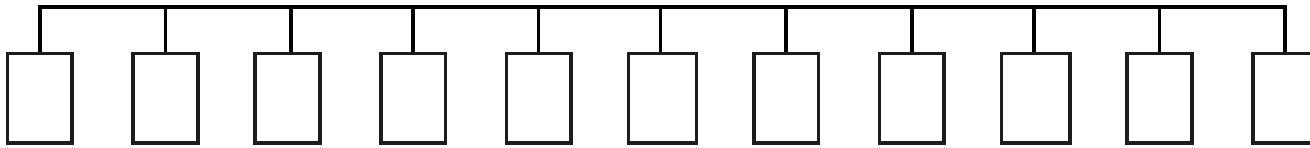
4. $\frac{1}{3}$



5. $\frac{1}{6}$



6. $\frac{1}{10}$



Part 2

Draw your own number line in your books from 0 to 1. Split this into equal pieces and label the fractions.