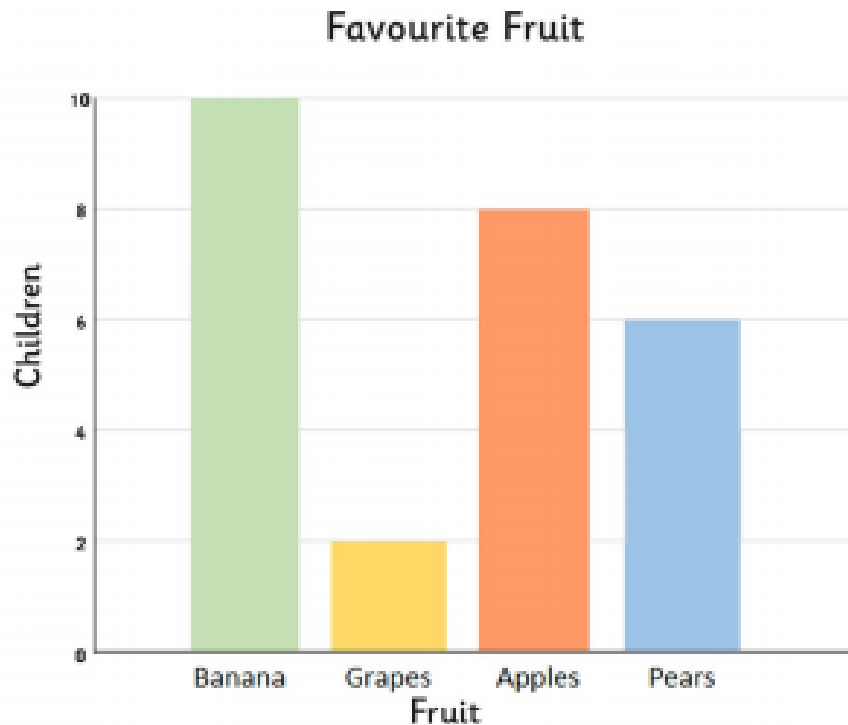


Maths 4 – Interpreting Bar Charts



Answer the following questions.

1. What is the favourite fruit?

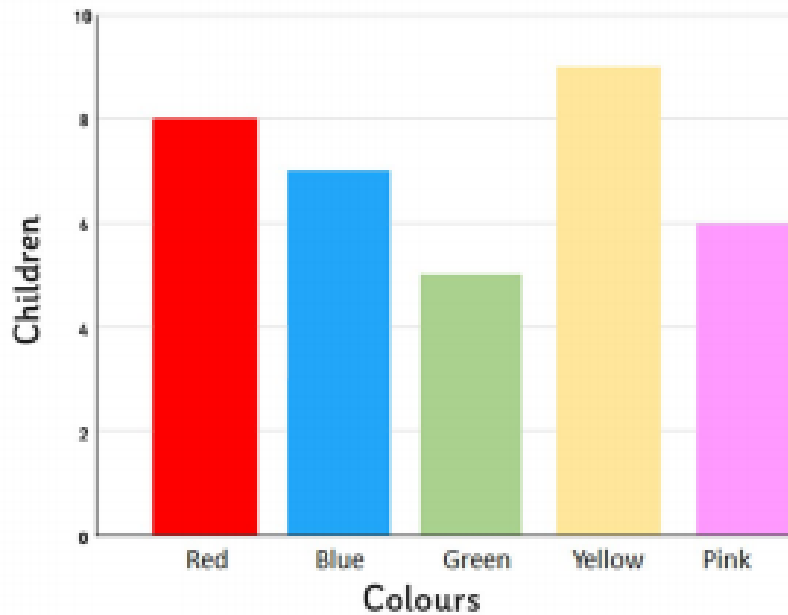
2. How many children chose apples as their favourite fruit?

3. How many more children chose bananas than grapes, as their favourite fruit?

4. How many children chose apples or pears as their favourite fruit?

Write your own questions for a friend.

Favourite Colour



Answer the following questions.

1. What is the least favourite colour?

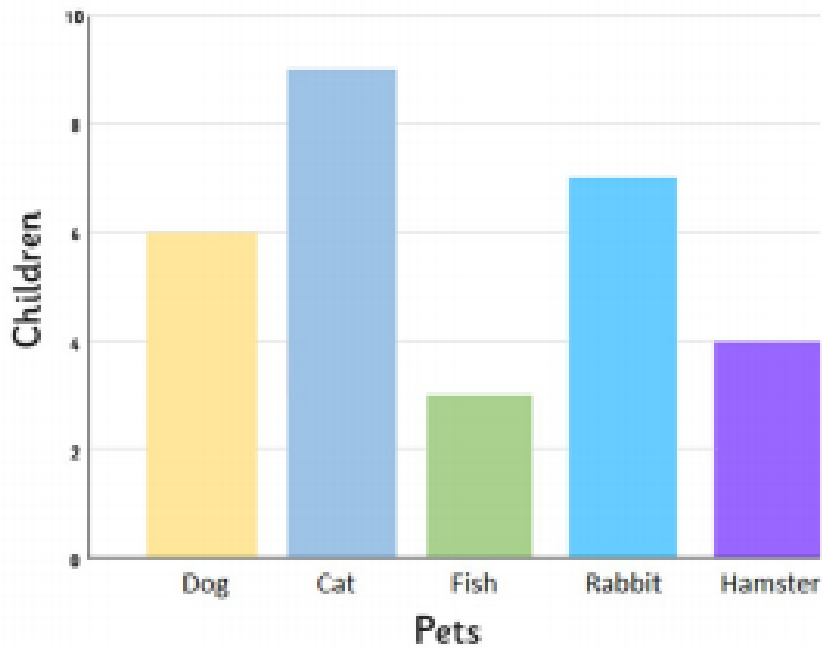
2. How many children chose yellow as their favourite colour?

3. How many fewer children chose green than blue as their favourite colour?

4. How many children chose pink and red as their favourite colour?

Write your own questions for a friend.

Class Pets



Answer the following questions.

1. Which is the most common pet?

2. How many pets are there in the class?

3. How many more rabbits than hamsters are there?

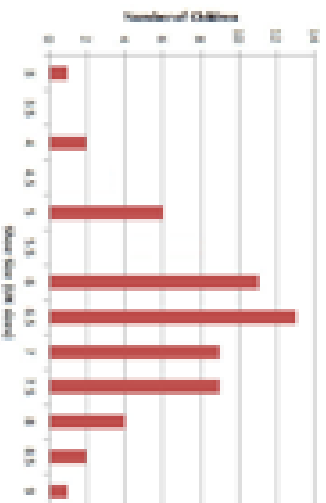
4. How many fewer dogs than cats are there?

Write your own questions for a friend.

Step 1

Mastery

Shoe Sizes of Children in Class 3

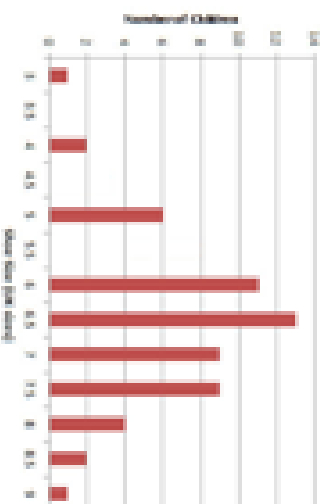


Carton-Tail says that there are 3 children will size 5 shoes because the bar is on the third line up. Do you agree? Why?

Step 2

Mastery

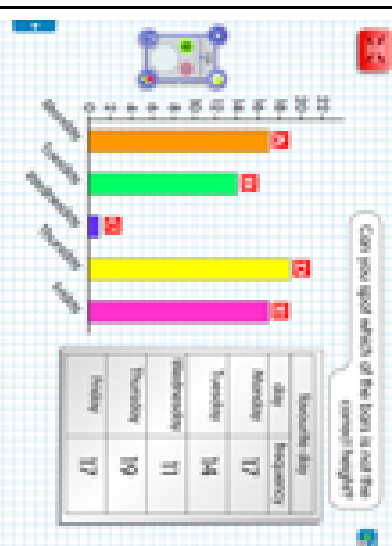
Shoe Sizes of Children in Class 3



Essasy knows that there are four children who have size 4.5 shoes and seven children have 5.5 size shoes. Can you complete the bar chart?

Step 3

Mastery



Which bar is not the correct height and what else has not been put on the graph? Why are these features important?

