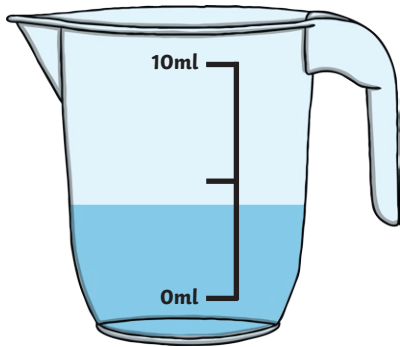


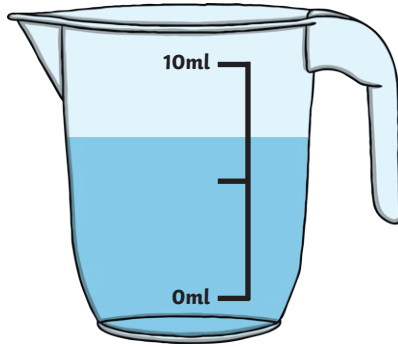
Estimating Volume

Aim: I can estimate volume.

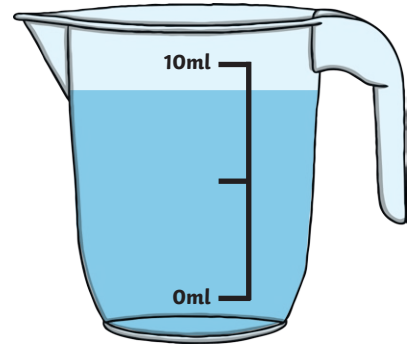
Estimate how much water there is in each jug.



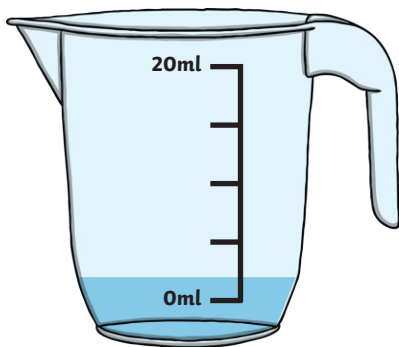
1. _____ ml



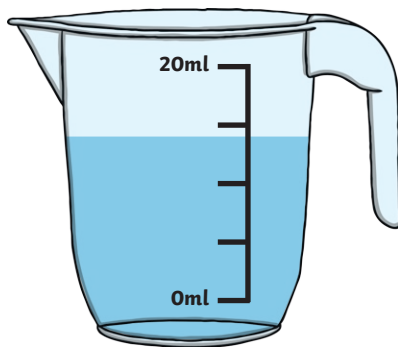
2. _____ ml



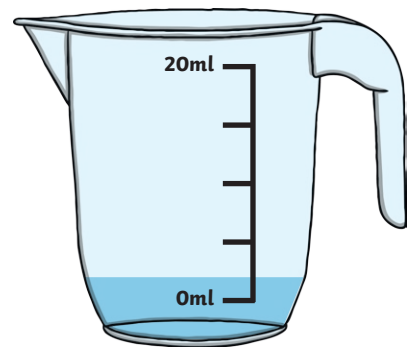
3. _____ ml



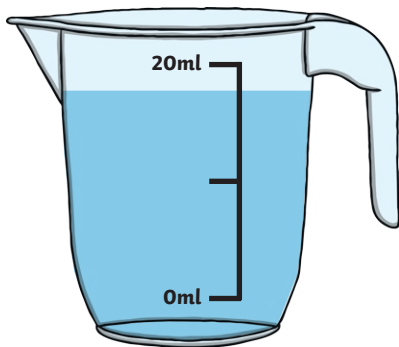
4. _____ ml



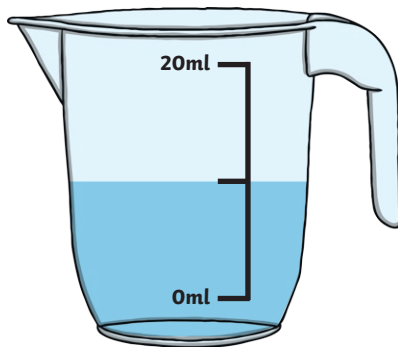
5. _____ ml



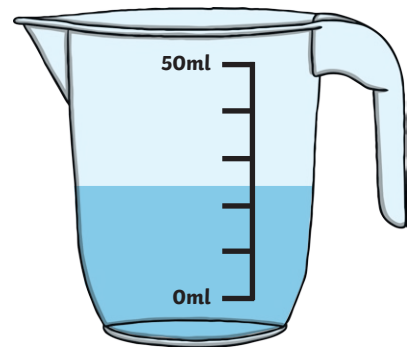
6. _____ ml



7. _____ ml



8. _____ ml

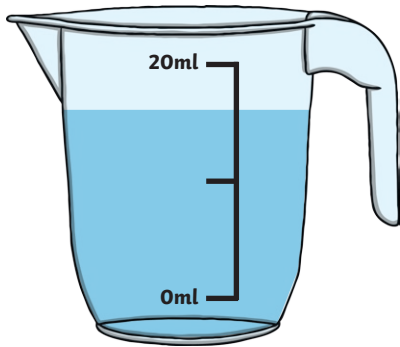


9. _____ ml

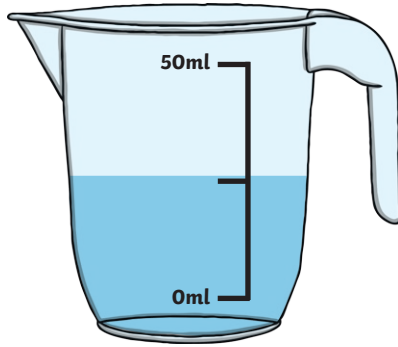
Estimating Volume

Aim: I can estimate volume.

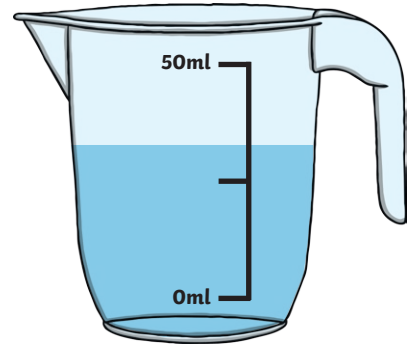
Estimate how much water there is in each jug.



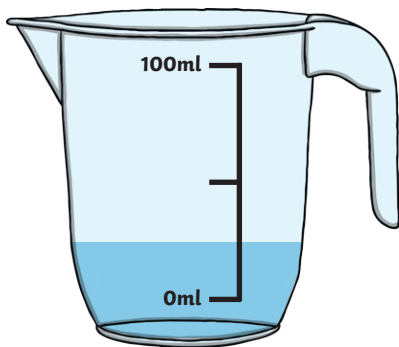
1. _____ ml



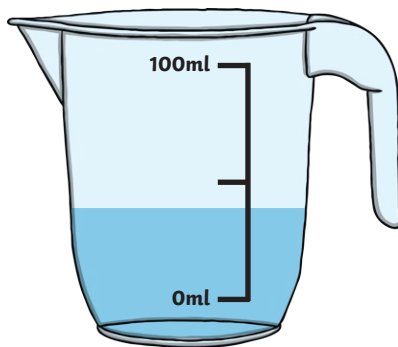
2. _____ ml



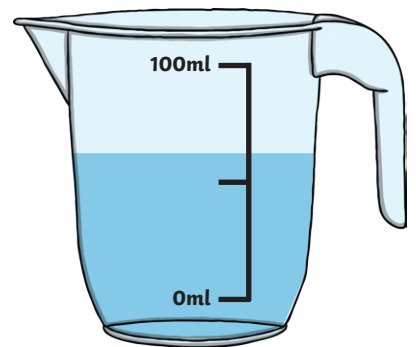
3. _____ ml



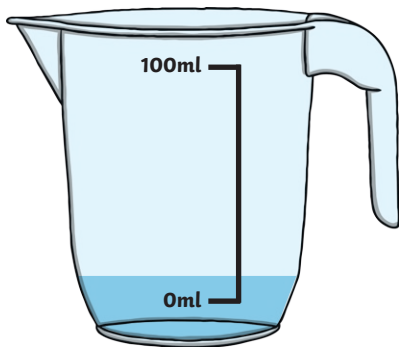
4. _____ ml



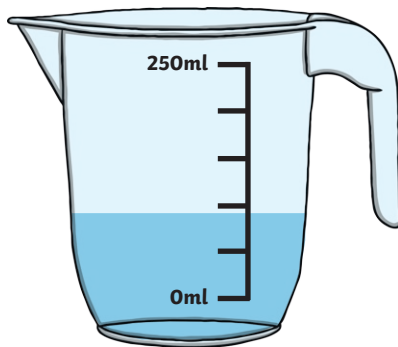
5. _____ ml



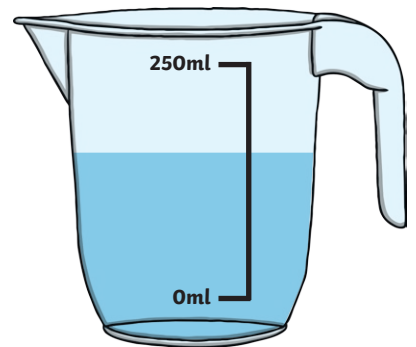
6. _____ ml



7. _____ ml



8. _____ ml

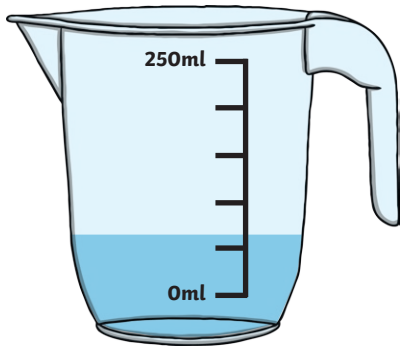


9. _____ ml

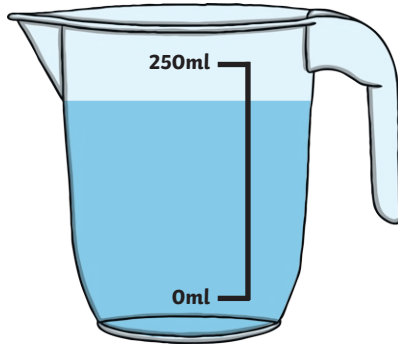
Estimating Volume

Aim: I can estimate volume.

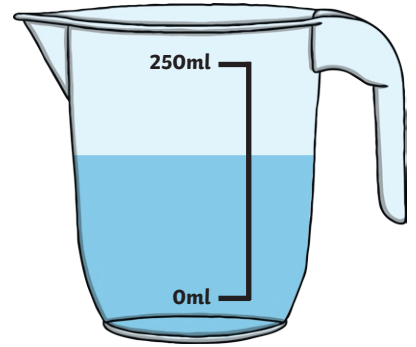
Estimate how much water there is in each jug.



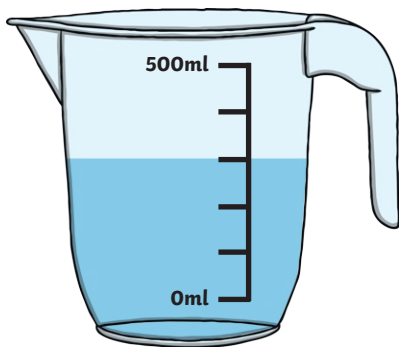
1. _____ ml



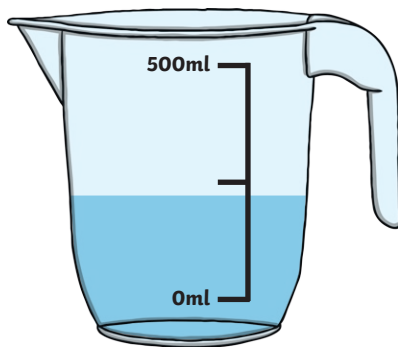
2. _____ ml



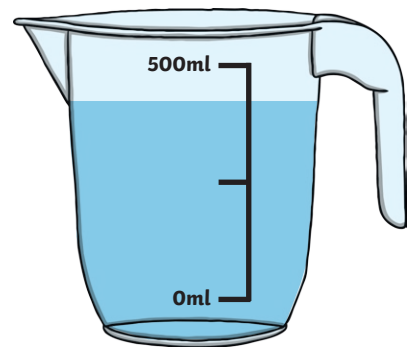
3. _____ ml



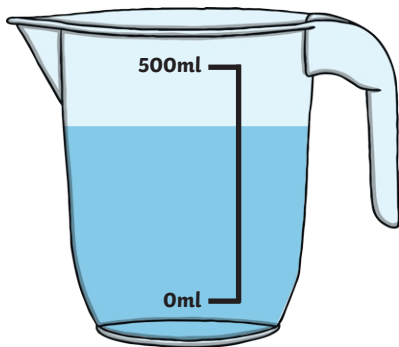
4. _____ ml



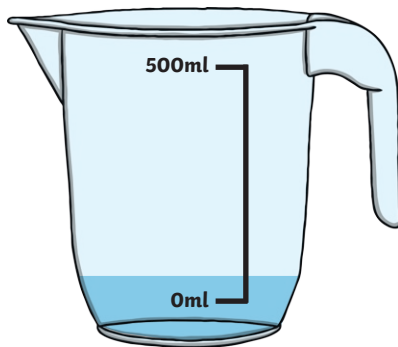
5. _____ ml



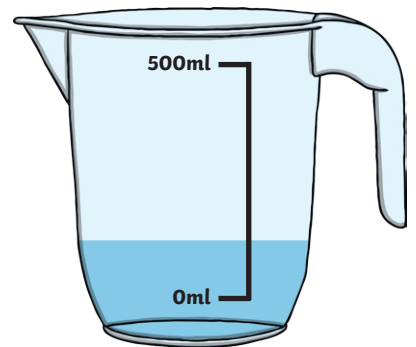
6. _____ ml



7. _____ ml



8. _____ ml



9. _____ ml

Measuring Volume Answers

★	★★	★★★
1. 3ml - 4ml	1. 16ml - 17ml	1. 60ml - 70ml
2. 6ml - 7ml	2. 25ml - 27ml	2. 190ml - 210ml
3. 8ml - 9ml	3. 30ml - 35ml	3. 135ml - 155ml
4. 2ml - 3ml	4. 22ml - 27ml	4. 300ml
5. 13ml - 14ml	5. 38ml - 43ml	5. 200ml - 230ml
6. 2ml - 3ml	6. 62ml - 67ml	6. 400ml - 450ml
7. 17ml - 19ml	7. 8ml - 15ml	7. 360ml - 390ml
8. 10ml	8. 85ml - 95ml	8. 35ml - 65ml
9. 23ml - 26ml	9. 150ml - 170ml	9. 100ml - 150ml