


Maths 2

Mastery


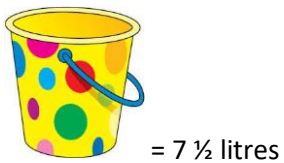
1.

How many cups would it take to fill the bucket?



2.

Find different ways to fill the bucket using all three containers at least once.



3.

Using just this bucket and jug can you make exactly 1 litre, 2 litres, 3 litres, 4 litres and 5 litres?

Explain how you made each amount.

